




Topic	Prospective questions that can be framed	Photos that can be used for the activity/concept
Adding/subtracting	<p>Mama had kept 20 cookies in the bottle. Sonia managed to open the lid and took one. Alas! Few of them fell off the jar too. How many are left in the jar now? Help mama count...</p>	<p>Picture of cookie jar from our own kitchen or an image of pack of biscuits with few of it fallen out of the pack</p> 
Skip count/multiples Odd and Even	<p>Q1. Our building has four floors. There are 15 stairs that takes you to first floor, then how many stairs will you climb to reach fourth floor? What is the shortest method to calculate that?</p> <p>Q2. In this set of 15 stairs how may sets of 2's are there? How may sets of 3's are found?</p> <p>Q3. If you skip by 2's, in how many jumps will you reach the first floor?</p> <p>Q4. Colour only even numbered steps/or/ colour only the odd numbered steps in the given picture</p> <p>Q5. If we have library in the second floor, how many steps will you climb from the ground floor?</p>	<p>Pictures of stairs from inside the house or from any building including school</p> 
Measurement	<p>Q1. From this shadow picture of five people Can you tell which person is the shortest?</p> <p>Q2. Looking at the shadows, number them in ascending order of height</p> <p>Q3. Who is the tallest person, identify and circle?</p>	<p>Shadows picture</p>

	<p>Q4.What is the difference in height between the Tallest shadow and shortest shadow? Q5. Are there any two shadows that measure same height? Check and infer.</p>	
<p>Place value/rounding off/total/how much more /how much less/greater than /less than</p>	<p>Q1. Which team scored more? Q2.For the match to tie, how much more should the losing team score? Q3. Look at the final scores, how many runs are they less from the winning team? Q4.What number is in one's place .Look at the score card of team A Q5. Round off the team B's score to nearest hundred. Q6. What is half of team A score? Q7. Which team's score is even number? Q8.Compare both the score cards at the 10th over. Identify which team's score was greater</p>	<p>Score board of cricket match or any sport</p> 